

Today I used:

TA



peer



Teacher



independent



04/05/2022



LO-To know time o'clock and half past

1 Match the clocks to the times.



7 o'clock



3 o'clock



12 o'clock



10 o'clock

Complete the sentence.

At o'clock, the minute hand points to

2 Match the clocks to the times.



half past 4



half past 1



half past 9



half past 6

Complete the sentence.

At half past, the minute hand points to

3 Write the time shown on each clock.

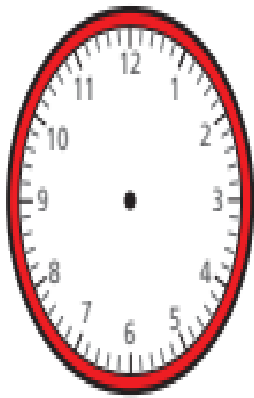
Use the word bank to help you.

o'clock

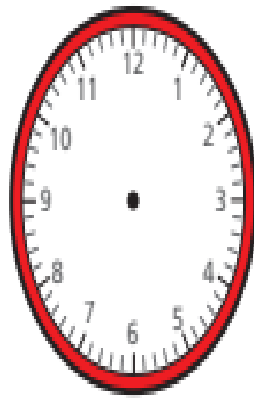
half past



4 Draw hands to show the time on each clock.



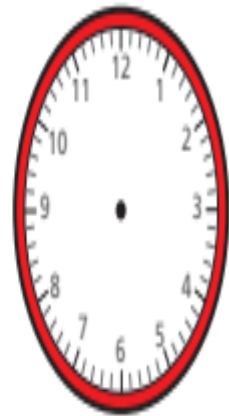
half past 11



half past 3



4 o'clock



1 o'clock

5 Circle to show whether each sentence is true or false.

a) The clock shows 6 o'clock.

true

false



b) The clock shows half past 10

true

false



c) The clock shows half past 12

true

false

